

Revision and
Assessment Pack

6

Junior Secondary
**Exploring
Geography**
Third Edition

Sample

**Know these
places**
(Enhanced edition)

OXFORD
UNIVERSITY PRESS

Contents

Hong Kong

- 1 18 districts
- 2 Selected peaks 1
- 3 Selected rivers

China

- 4 Administrative areas 3
- 5 Relief
 - 5a Selected plains and basins in China 6
 - 5b Selected plateaux and mountain ranges in China
- 6 Climate
 - 6a Temperature zones in China
 - 6b Wet and dry regions in China
 - 6c Climatic zones in China
- 7 Selected rivers, lakes and seas
- 8 Agriculture
 - 8a Major farming regions in China
 - 8b Length of growing season in China
- 9 Energy resources 9
 - 9a Coal resources in China
 - 9b Oil and gas resources in China
 - 9c Nuclear power plants in China
 - 9d Renewable energy resources in China

Asia

- 10 Countries in East Asia and South-east Asia

World

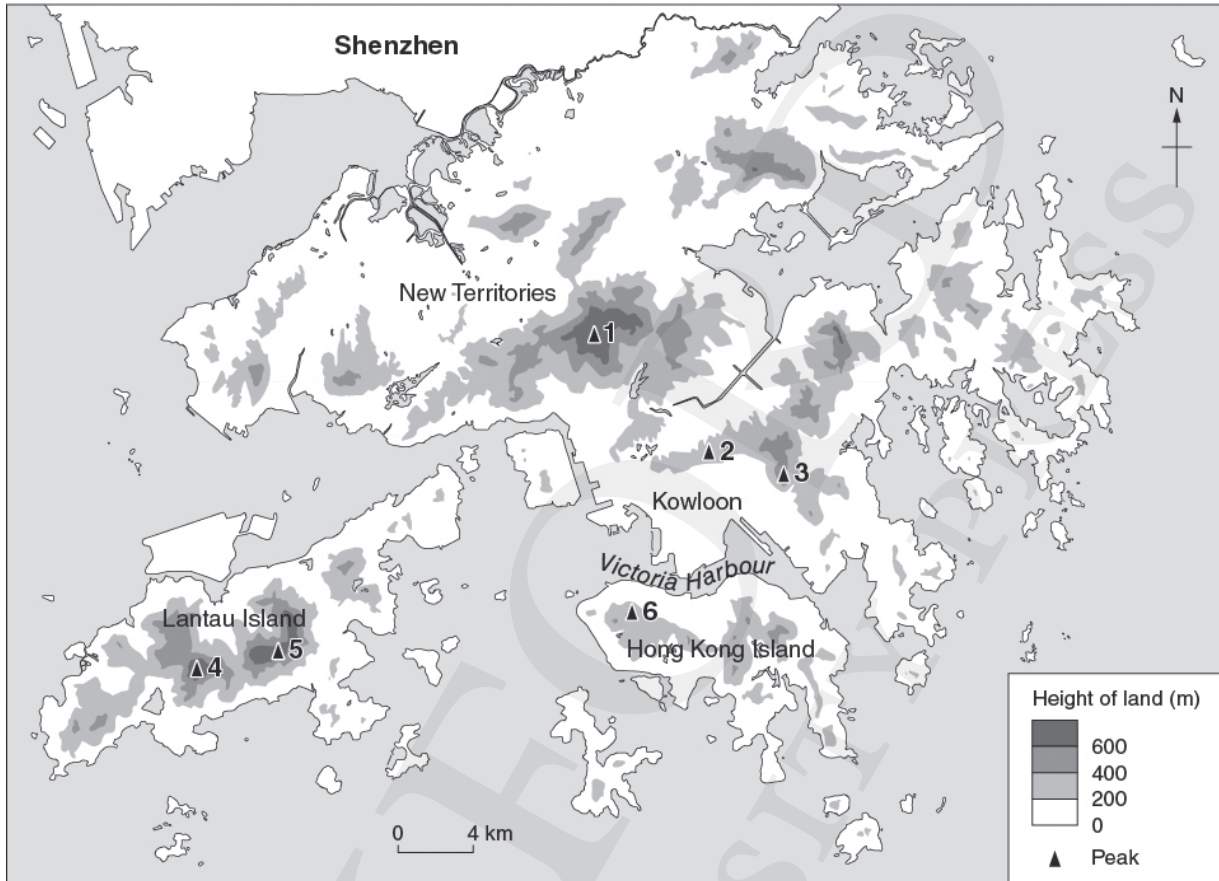
- 11 Continents and oceans
- 12 Selected countries 12
- 13 Selected rivers, seas and lakes
 - 13a Selected rivers in the world
 - 13b Selected seas and lakes in the world
- 14 Selected mountain ranges
- 15 Selected deserts

Map 2

Hong Kong: Selected peaks

Map labelling

Fill in the names of the peaks according to the numbers.



- | | | | | | |
|---|----------------------------------|---------|---|-----------------------------------|---------|
| 1 | <u>Tai Mo Shan</u> | (957 m) | 4 | <u>Lantau Peak/Fung Wong Shan</u> | (934 m) |
| 2 | <u>Lion Rock</u> | (495 m) | 5 | <u>Sunset Peak/Tai Tung Shan</u> | (869 m) |
| 3 | <u>Kowloon Peak/Fei Ngo Shan</u> | (602 m) | 6 | <u>Victoria Peak</u> | (552 m) |

Quiz

- Which is the highest peak in Hong Kong?
Tai Mo Shan
- Which is the highest peak on Lantau Island?
Lantau Peak/Fung Wong Shan

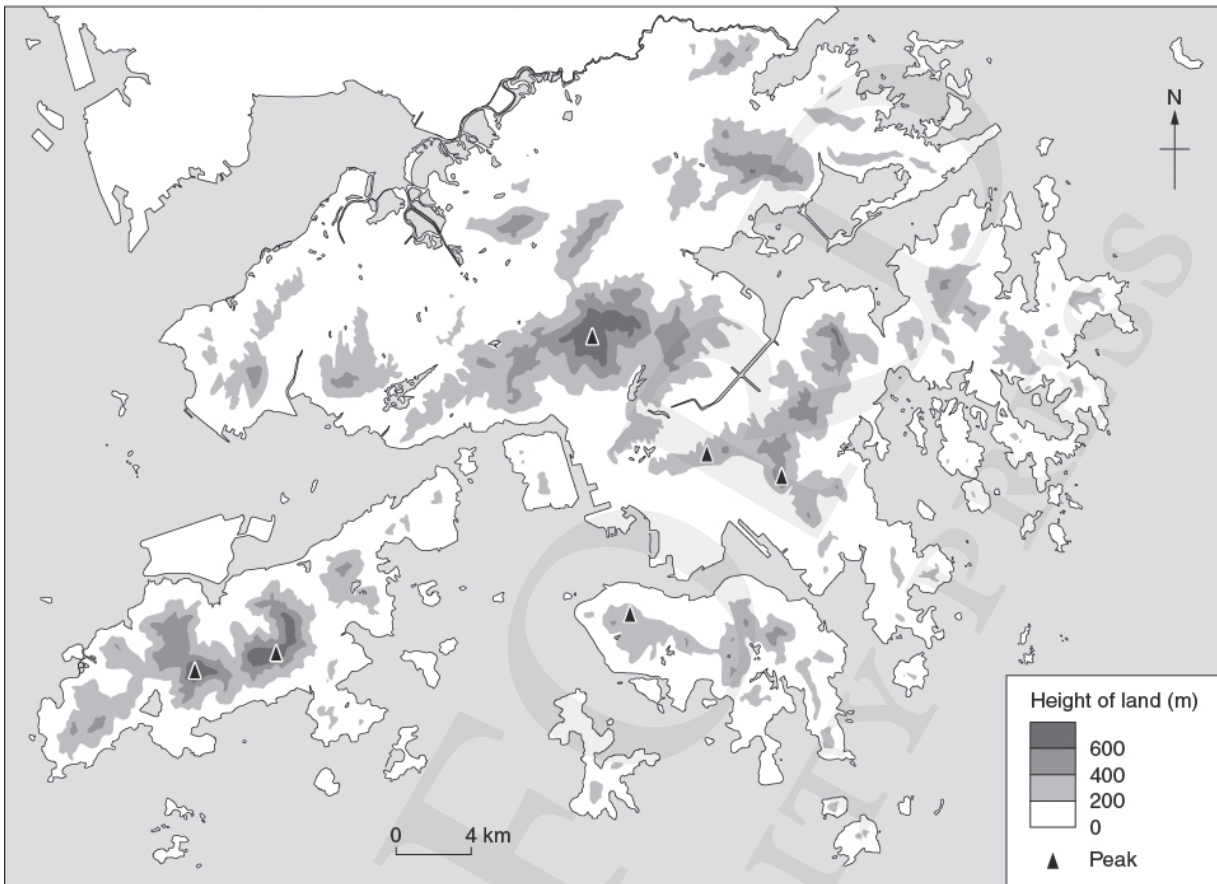
Interesting facts

✧ The lowest point in Hong Kong (about 67.3 metres below mean sea level) is in Lo Chau Mun (螺洲門) to the north of Po Toi Island.

Map 2

Hong Kong: Selected peaks

Blank map



Map 4

China: Administrative areas

Map labelling

Fill in the names of the 34 administrative areas according to the numbers, and write the short names of the administrative areas in the brackets.



- | | | | | | |
|---|---------------------|----------|----|------------------|---------|
| 1 | <u>Heilongjiang</u> | (Hei) | 7 | <u>Shandong</u> | (Lu) |
| 2 | <u>Jilin</u> | (Ji) | 8 | <u>Jiangsu</u> | (Su) |
| 3 | <u>Liaoning</u> | (Liao) | 9 | <u>Shanghai</u> | (Hu) |
| 4 | <u>Hebei</u> | (Ji) | 10 | <u>Zhejiang</u> | (Zhe) |
| 5 | <u>Beijing</u> | (Jing) | 11 | <u>Fujian</u> | (Min) |
| 6 | <u>Tianjin</u> | (Jin) | 12 | <u>Guangdong</u> | (Yue) |

- | | |
|--|--|
| 13 <u>Nei Mongol (Zizhiqu)</u> (Neimenggu) | 24 <u>Ningxia (Huizu Zizhiqu)</u> (Ning) |
| 14 <u>Shanxi</u> (Jin) | 25 <u>Gansu</u> (Gan/Long) |
| 15 <u>Henan</u> (Yu) | 26 <u>Sichuan</u> (Chuan/Shu) |
| 16 <u>Anhui</u> (Wan) | 27 <u>Yunnan</u> (Yun/Dian) |
| 17 <u>Hubei</u> (E) | 28 <u>Qinghai</u> (Qing) |
| 18 <u>Jiangxi</u> (Gan) | 29 <u>Xinjiang (Uygur Zizhiqu)</u> (Xin) |
| 19 <u>Hunan</u> (Xiang) | 30 <u>Xizang (Zizhiqu)</u> (Zang) |
| 20 <u>Shaanxi</u> (Shan/Qin) | 31 <u>Hainan</u> (Qiong) |
| 21 <u>Chongqing</u> (Yu) | 32 <u>Taiwan</u> (Tai) |
| 22 <u>Guizhou</u> (Gui/Qian) | 33 <u>Hong Kong (SAR)</u> (Gang) |
| 23 <u>Guangxi (Zhuangzu Zizhiqu)</u> (Gui) | 34 <u>Macau (SAR)</u> (Ao) |

Quiz

1 Where is the capital of China?

Beijing

2 Name the FOUR municipalities in China.

Beijing, Tianjin, Shanghai, Chongqing

Interesting facts

- ✧ Among all the administrative areas in China, Guangdong has the largest size of population, reaching 115 million in 2019.

Map 4

China: Administrative areas

Blank map

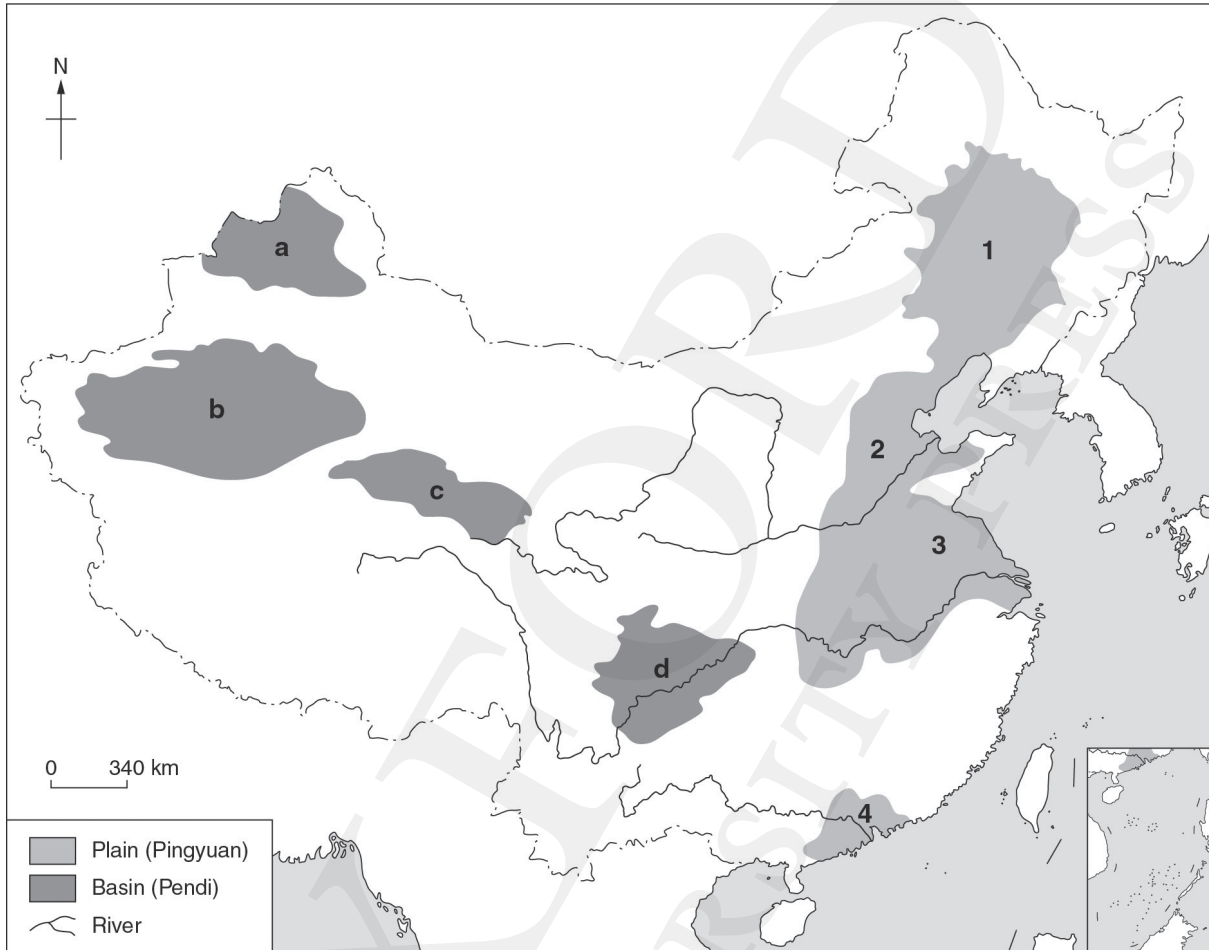


Map 5 **China: Relief**

5a Selected plains and basins in China

Map labelling

Fill in the names of the plains and basins according to the numbers.



A Plains

- | | |
|---------------------------|--|
| 1 <u>Dongbei Pingyuan</u> | 3 <u>Middle and Lower Chang Jiang Pingyuan</u> |
| 2 <u>Huabei Pingyuan</u> | 4 <u>Zhujiang Delta</u> |

B Basins

- | | |
|------------------------|------------------------|
| a <u>Junggar Pendi</u> | c <u>Qaidam Pendi</u> |
| b <u>Tarim Pendi</u> | d <u>Sichuan Pendi</u> |

Quiz

1 Which is the largest plain in China?

Dongbei Pingyuan (area: about 350,000 km²)

2 Which plain is Hong Kong located on?

Zhujiang Delta

3 Which is the largest basin in China?

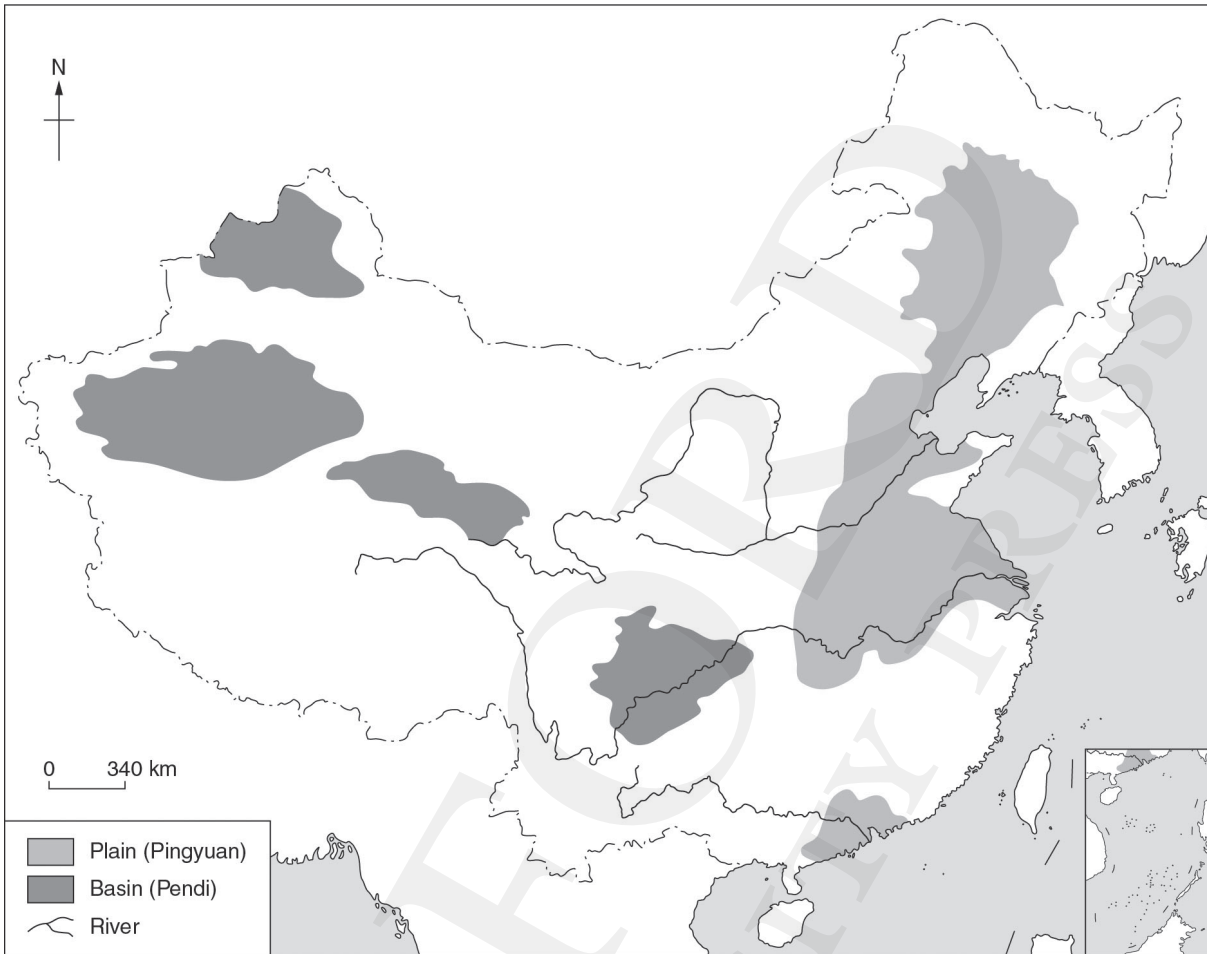
Tarim Pendi (area: about 530,000 km²)

Interesting facts

- ✧ Basins and plains account for about 33% of China's total area.
- ✧ Huabei Pingyuan is one of the most densely populated areas in the world.
- ✧ The centre of the Tarim Pendi is the Takla Makan Desert, which is the largest desert in China.

5a Selected plains and basins in China

Blank map



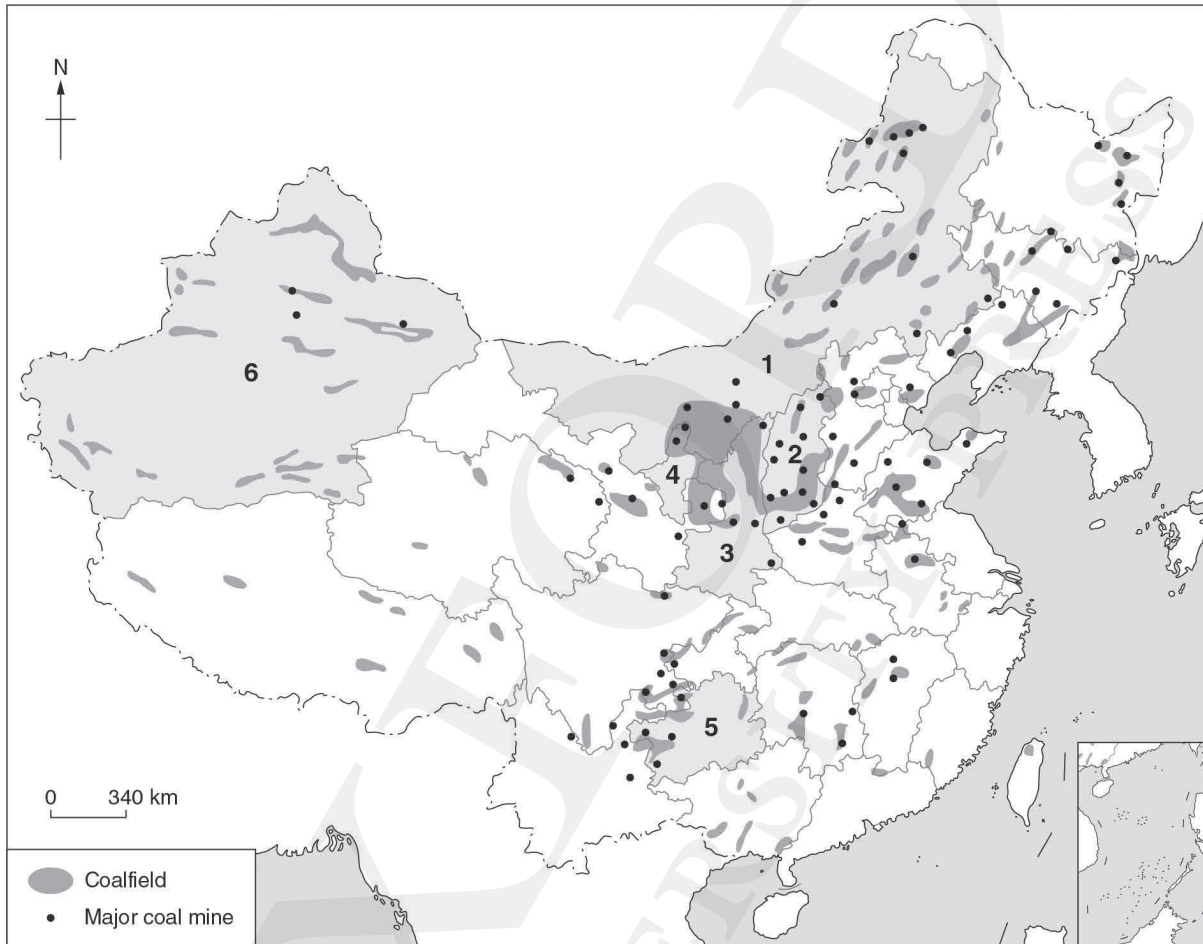
Map 9

China: Energy resources

9a Coal resources in China

Map labelling

Fill in the names of the administrative areas with large coal reserves in China according to the numbers.



- 1 Nei Mongol (Zizhiqu)
- 2 Shanxi
- 3 Shaanxi

- 4 Ningxia (Huizu Zizhiqu)
- 5 Guizhou
- 6 Xinjiang (Uygur Zizhiqu)

Quiz

In which regions are the coal resources mainly found? Tick ‘✓’ FOUR major regions.

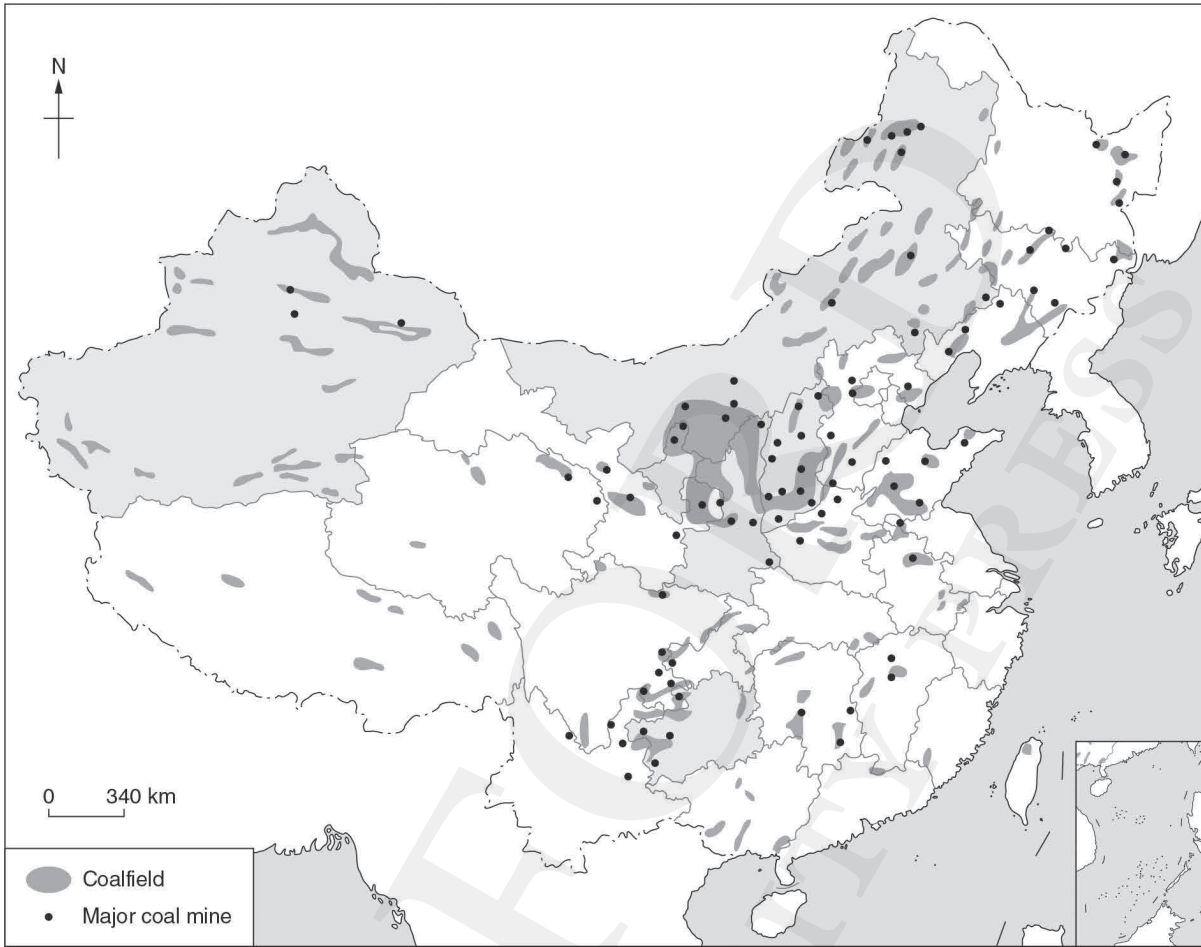
- | | | | |
|-------------------------------------|---------------------|-------------------------------------|---------------------|
| <input checked="" type="checkbox"/> | Northern China | <input type="checkbox"/> | South Central China |
| <input checked="" type="checkbox"/> | North-eastern China | <input checked="" type="checkbox"/> | South-western China |
| <input type="checkbox"/> | Eastern China | <input checked="" type="checkbox"/> | North-western China |

Interesting facts

- ✧ The known coal-containing area in China occupies 5.7% of the country’s total land area.
- ✧ Shanxi, Shaanxi and Nei Mongol alone account for 64% of total coal reserves in China.
- ✧ China is the largest coal producer in the world, accounting for about 50% of the global coal production in 2019.

9a Coal resources in China

Blank map

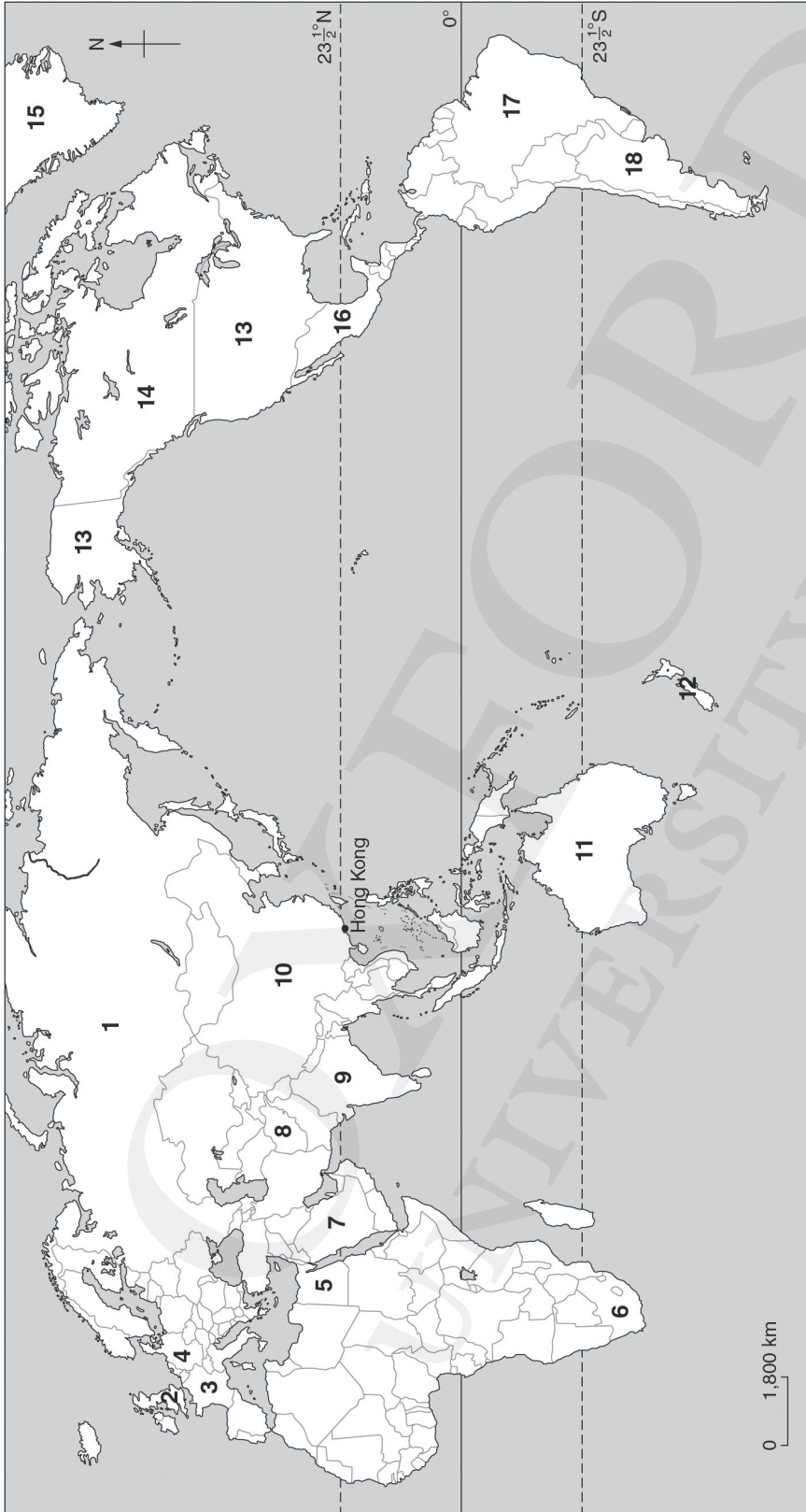


Map 12

World: Selected countries

Map labelling

Fill in the names of the countries according to the numbers.



- | | | | |
|---|----------------------------|----|---------------------------------------|
| 1 | <u>Russia</u> | 10 | <u>China</u> |
| 2 | <u>United Kingdom (UK)</u> | 11 | <u>Australia</u> |
| 3 | <u>France</u> | 12 | <u>New Zealand</u> |
| 4 | <u>Germany</u> | 13 | <u>United States of America (USA)</u> |
| 5 | <u>Egypt</u> | 14 | <u>Canada</u> |
| 6 | <u>South Africa</u> | 15 | <u>Greenland</u> |
| 7 | <u>Saudi Arabia</u> | 16 | <u>Mexico</u> |
| 8 | <u>Afghanistan</u> | 17 | <u>Brazil</u> |
| 9 | <u>India</u> | 18 | <u>Argentina</u> |

Quiz

- What are the FOUR largest countries in the world?
 - 1st: Russia (area: about 17 million km²)
 - 2nd: Canada (area: about 10 million km²)
 - 3rd: USA (area: about 9.8 million km²)
 - 4th: China (area: about 9.6 million km²)
- Which continent is China located on?

Asia

Interesting facts

- ✧ With an area of 0.44 km² (only one third of the Hong Kong Disneyland) and a population of about 825, Vatican City in Europe is the smallest country in the world.
- ✧ The land area of China is almost equal to the entire land area of Europe.

Map 12

World: Selected countries

Blank map

